

THAKUR VIDYA MANDIR HIGH SCHOOL & JUNIOR COLLEGE

III Terminal Examination 2015-16

Subject : English

Name : _____ Std: II Div : _____ Roll No. _____

MARKS: 60

DATE - 04/04/2016

Time : 2 hrs 45 mins

Q I A) Do as directed :

10

1) Write the plural of

a) cake - _____

b) tooth - _____

2) Write words that begin with :

a) tr - _____

b) ch - _____

3) Write the rhyming word for :

a) soon - _____

b) call - _____

4) Write the opposite word for :

a) careful - _____

b) weak - _____

5) Write the words correctly :

a) feeld - _____

b) stroy - _____

B) Match the column :

4

A

B

1) as brave as

a) little chickens

2) merry

b) to notice things carefully

3) five

c) lion

4) pay attention

d) sunshine

Ans. 1) _____ 2) _____ 3) _____ 4) _____

C) True or false

4

1) Cats and dogs sleep hanging up side down. _____

2) Ira carries the magic carpet to school. _____

3) An old monkey lay across the path. _____

4) the sisters took the beautiful gifts to their father – in – law. _____

QII A) Fill in the blanks :

4

[twenty, liar, sorted, forest, spot]

1) Many birds and animals lived in the _____

2) Little children have _____ milk teeth.

3) The villagers called the shepherd boy a _____

4) The dried beans are cleaned and _____

B) Who said to whom ?

4

1) " My wife wants to be a Queen."

Ans: _____

2) " How far is it from here to the moon?"

Ans: _____

C) Make Sentences :

4

1) solve : _____

2) harm : _____

QIII A) Complete the lines of the poem :

2

1) He has a tongue

2) Leave your supper

B) Answer the following questions :

8

1) Where did the king have his royal meals?

Ans : _____

2) When does Spot seem to think most ?

Ans : _____

3) Why does a proof – reader read the typing in the book carefully?

Ans : _____

4) What did the farmer ask the sons to do with each stick?

Ans : _____

Grammar

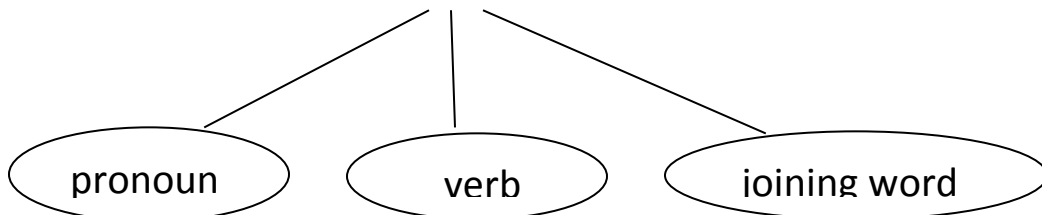
QIV A) Do as directed :

15

1) In the sentence

Anil and I play cricket.

Find out and write



2) Write the word that sound the same as

Won - _____ [seen, one, two]

3) Write the smaller word in

thrice - _____

4) Find the odd man out and cross it.

milk, juice, rose, coffee

5) Choose the correct spelling and rewrite.

Shoes and ___ soks / socks

6) Punctuate the following

brother my marbles collects

7) Plan + _____

[Use a consonant or a vowel and make a new word]

B) Fill in the blanks with the correct words from the bracket given :

1) I _____ Raghav. (are/ am)

2) The trees _____ full of apples. (were / was)

3) The children are _____ the class. (on , in)

4) How _____ (much / many) birds sat on the windowsill?

5) Susan is my _____ (red / best) friend.

C) Write five lines on any one of the topic.

5

‘ Road Safety ’ or ‘ Lokmanya Tilak ’.

Thakur Educational Trust's (Regd.)
THAKUR VIDYA MANDIR HIGH SCHOOL & JUNIOR COLLEGE

III Terminal Examination 2015-16

Subject : Mathematics

NAME _____ Std: II DIV. _____ Roll NO.: _____

DATE - 07/ 04 /2016

MARKS: 60

Timing : 2 hrs 45 mins

Q I A] Fill in the blanks :

(4)

1. January is the _____ month of the year.
2. In the number 89 , _____ is in the tens place.
3. Four _____ are thirty-six.
4. I have a five rupee note and 10 one rupee coins that makes ₹ _____ altogether.

B] Match the column :

(5)

- | | |
|--|---|
| 1. Letter 'A' | a) Leap year |
| 2. ₹ 25 | b) 2 Slanting lines and 1 horizontal line |
| 3. February has 29 days in a | c) ₹ 30 |
| 4. 3×5 | d) Twenty five rupees |
| 5. <input type="text" value="₹ 20"/> <input type="text" value="₹ 5"/> <input type="text" value="₹ 5"/> | e) 15 |

Ans : 1 _____ 2. _____ 3. _____ 4. _____ 5. _____ 6. _____

C] Put (✓) for the right statement and (X) for the wrong statement

(5)

1. $53-1 = 54$
2. The number name of 132 is Two hundred and twenty three.
3. $12 \times 5 = 60$
4. $46 + 10 = 36$
5. ₹ 10 + ₹ 10 + ₹ 5 + ₹ 2 + ₹ 2 makes ₹ 31

II A.] Write in numerals :

(2)

1. Five hundred and six -
2. Three hundred and thirteen-

B] Write in words:**(3)**

a) 11 - _____

b) 788 - _____

c) 999 - _____

C] Fill in the boxes :**(6)**

a) $12 \times 4 =$

b) $7 \times$ $= 49$

c) $= 110$

d) Two threes $=$

QIII A] Do as directed :**(23)**

- 1) Write the correct number in the boxes to show the addition fact and the corresponding subtraction facts.

$3 + 7 = 10$	<input type="text"/> - <input type="text"/> $= 7$	<input type="text"/> - $7 =$ <input type="text"/>
--------------	---	---

2) 60, 36, 80, 26 Ascending = _____

- 3) Make a word problem of your own for the following addition

$22 + 12$

Ans. _____

- 4) Look at the number in the boxes. The circled numbers show the step of

- 5) Put the number in the proper column Number

Smaller number Bigger number

70, 8 _____

- 6) Poonam has 10 beads. If each child gets 2 beads how many children will get the beads

- a. Total number of beads
- b. Each child get 2 beads
- c. How many groups are formed ?
- d. So, how many children will get the beads ?

- 7) Observe the figure and fill in the boxes.

Write the number of the following shapes

a. Circles

b. triangles

8) Tick (✓) the animal that fly and cross the animal that do not fly.

Apple

Pigeon

Deer

9) Amar keeps hens in his poultry form. Following list shows the number of eggs he got. Observe it carefully and answer the question that follow.

Days	Eggs
Sunday	25
Monday	22
Tuesday	25
Wednesday	27
Thursday	32
Friday	20
Saturday	30

(a) On which day Amar get the least number of eggs ?

(b) On which days he get the same number of eggs ?

(c) On which day he get the maximum number of eggs ?

10) Count and write the number in the boxes.

a.

b.

11) Draw the remaining jumps of the frog.

12) Draw the shape of the cone and colour it.



13) Write the position of the letter 'O' in the word
PEACOCK _____

B] Add

$$\begin{array}{r} \text{T U} \\ 3 \ 9 \\ + 2 \ 5 \\ \hline \\ \hline \end{array}$$

C] Subtract

$$\begin{array}{r} \text{T U} \\ 2 \ 5 \\ - 1 \ 9 \\ \hline \\ \hline \end{array}$$

(4)

QIV A] Word problems

(10)

1) Mrs Johnson has 27 books with pictures and 13 books without pictures What is the total number of books she has ?

Tens	Units
<input type="text"/>	

Ans : _____

2) Rohit had 36 apples. He gave 19 apple to Suman. How many apples are left with Rohit?

Tens	Units
<input type="text"/>	

Ans : _____

All the best


Thakur Educational Trust's (Regd.)
THAKUR VIDYA MANDIR HIGH SCHOOL & JUNIOR COLLEGE
III Terminal Examination 2015-16
Subject : Mental Maths


NAME _____ Std: II DIV. _____ Roll NO.: _____
DATE - 09/ 04 /2016 MARKS: 10

QI] Fill in the blanks : **(5)**


1. _____ is celebrated on 26th January.
2. A leap year has _____ days.
3. If we subtract 6 from 12, We get _____.
4. $8 \times 9 = 9 \times$ _____.
5. To get 24, three has to be multiplied by _____.

QII] Do as directed : **(5)**

1. $9 \times 4 =$ _____ (multiply)
2.  _____ (Complete the pattern)

3.  (Write the number by the Abacus)

4. $75 - 0 =$ _____ (Subtract)

5. 

(Add the right number of flowers to make the total 6)

ALL THE BEST